




单元 1 Unit 1


看一看题目所给的序数，圈出正确的物品。


Look at the ordinal number given. Circle the correct thing.


	第一 1st	
第二 2 <sup>nd</sup>		

	第一 1st	
第八 8 <sup>th</sup>		

	第一 1st	
第五 5 <sup>th</sup>		

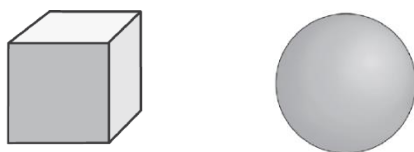
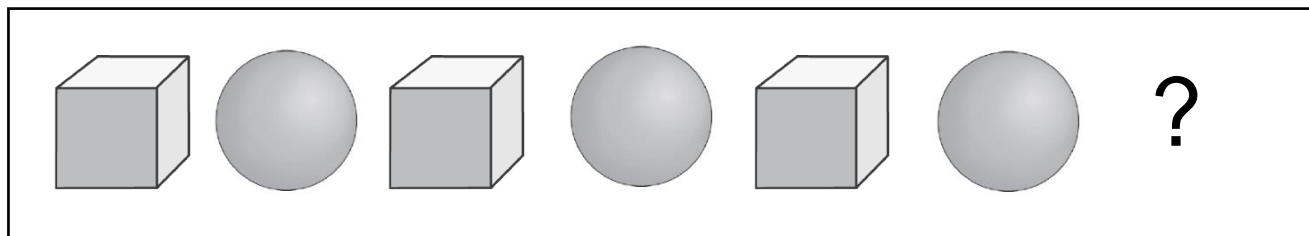
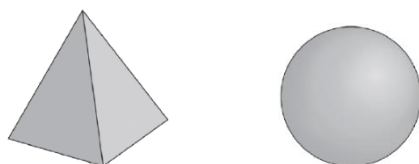
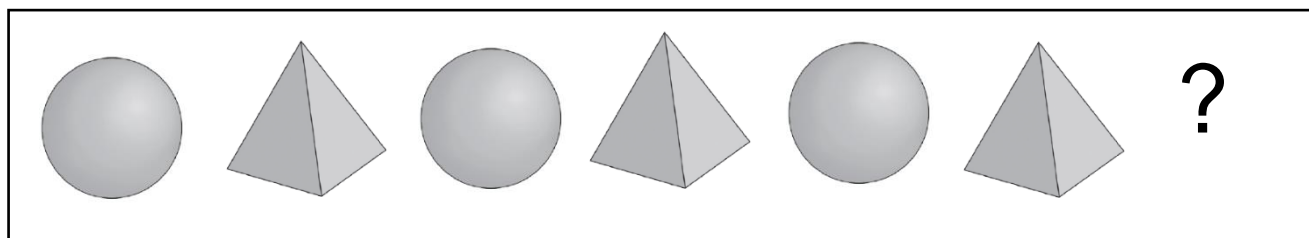
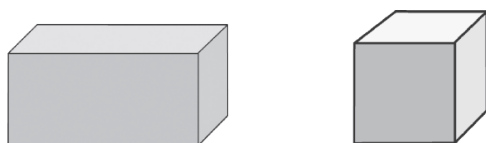
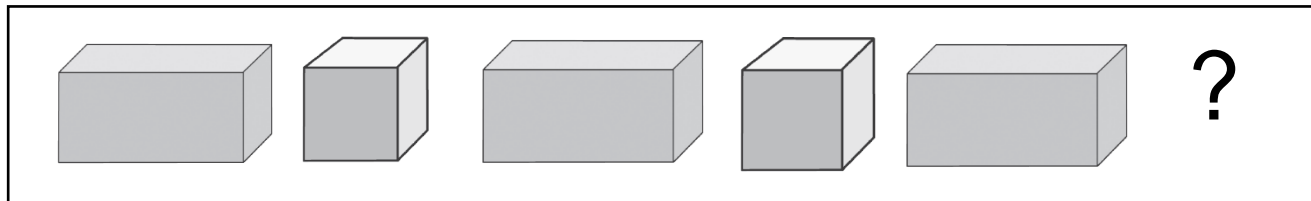
	第一 1st	
第四 4 <sup>th</sup>		

	第一 1st	
第六 6 <sup>th</sup>		

	第一 1st	
第九 9 <sup>th</sup>		

哪一个是缺少的立体？圈一圈以完成模式。

What is the missing 3D shape? Circle it to complete the pattern.



单元 3 Unit 3

---

加一加，减一减。把有相同答案的算式画线匹配。

Let's add or subtract. Then, match the sums that have the same answer.

$11 + 5 =$

$18 - 3 =$

$13 + 2 =$

$20 - 0 =$

$10 + 10 =$

$20 - 4 =$

$17 + 1 =$

$19 - 2 =$

$12 + 7 =$

$16 - 2 =$

$15 + 2 =$

$20 - 1 =$

$10 + 4 =$

$17 - 6 =$

$9 + 2 =$

$14 - 2 =$

$11 + 1 =$

$19 - 1 =$