

2023
Final Term
Progressive Assessment

科学
Science
K2



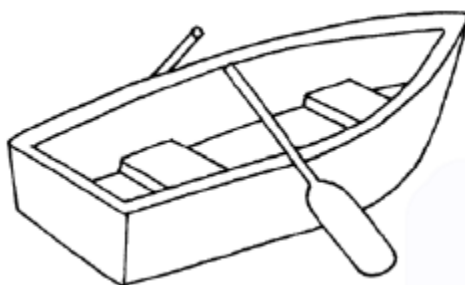


姓名 Name : _____

班级 Class : _____




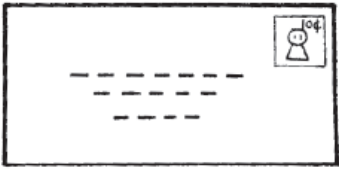
分数 Marks: _____/100

A. 圈出需要燃料来行驶的交通工具。[10 分]

Circle the vehicles that need fuel to move. [10 marks]



B. 看一看每张图片中的物品 A，画一画它们的影子。[10 分]
 Look at item A in each picture. Draw its shadow. [10 marks]

<div data-bbox="268 436 347 526" data-label="Text"> <p>A</p> </div> 	
<div data-bbox="252 772 331 862" data-label="Text"> <p>A</p> </div> 	
<div data-bbox="242 1153 322 1243" data-label="Text"> <p>A</p> </div> 	
<div data-bbox="207 1512 287 1601" data-label="Text"> <p>A</p> </div> 	
<div data-bbox="239 1848 319 1937" data-label="Text"> <p>A</p> </div> 